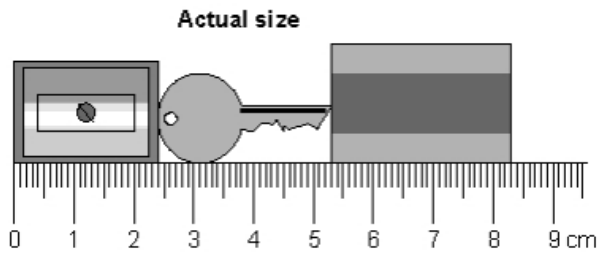


## Wednesday 27th January 2021

5.

Here are a pencil sharpener, a key and a rubber.



What is the length of **all three things** together?

Give your answer in **millimetres**.

1 mark

What is the length of the **key**?

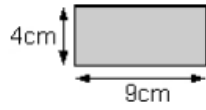
Give your answer in **millimetres**.

1 mark

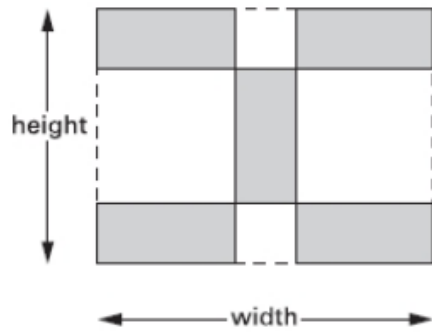
6.

Kim has some rectangular tiles.

Each one is **4 centimetres** by **9 centimetres**.



She makes a design with them.



Calculate the **width** and **height** of her design.

width =  cm

Height =  cm

2 mark

## Answers

5.

(a) 83 mm **OR** 8 cm 3 mm  
*Do not accept 8.3 mm*

1

(b) 29 mm **OR** 2 cm 9 mm  
*Do not accept 2.9 mm*

1

[2]

6.

(a) width = 22

1

(b) height = 17

*If the correct answers are transposed, award the mark for 16b only.*

1

[2]