







$\frac{3}{5}$		$\frac{3}{4}$
Three fifths		
		

Here are 9 cards.

Sort the cards into different groups.

Can you explain how you made your decision?

Can you sort the cards in a different way?

Complete the Frayer model to describe a unit fraction.

Can you use the model to describe the following terms?

Non-unit fraction	Numerator
	Denominator

